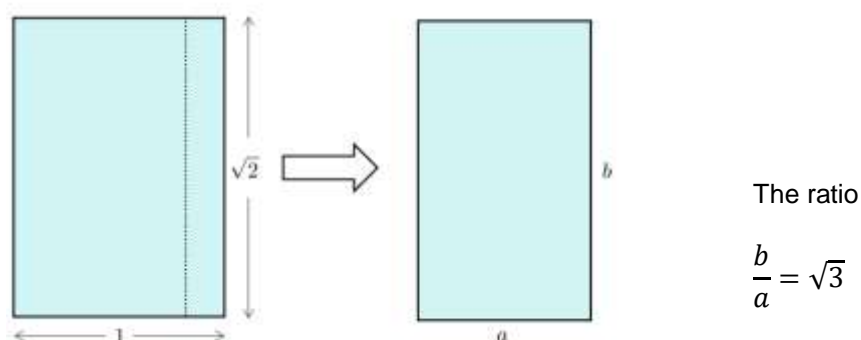


# Mathematical Problem Solving

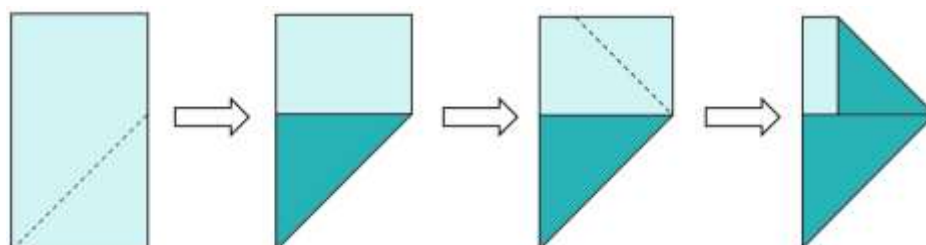
## AS/A Level example

### Solution to example 3

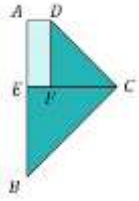
A piece of paper measures 1 unit by  $\sqrt{2}$  units. A strip of paper is removed so that the dimensions of the paper are  $a$  and  $b$  as shown in the diagram below:



The piece of paper is now folded like this:



Find the perimeter and area of the final shape.



$$BE = \frac{\sqrt{2}}{\sqrt{3}}, \quad CE = \frac{\sqrt{2}}{\sqrt{3}} \quad (45^\circ \text{ triangle})$$

Since BEC is a  $45^\circ$  right-angled triangle,  $BC = BE\sqrt{2}$

$$BC = \frac{\sqrt{2}}{\sqrt{3}} \cdot \sqrt{2} = \frac{2}{\sqrt{3}} = \frac{2\sqrt{3}}{3}$$

$$CF = DF = AE = \sqrt{2} - \frac{\sqrt{2}}{\sqrt{3}} = \frac{\sqrt{6}-\sqrt{2}}{\sqrt{3}} = \frac{\sqrt{18}-\sqrt{6}}{3} = \frac{3\sqrt{2}-\sqrt{6}}{3}$$

$CD = DF\sqrt{2}$  (another  $45^\circ$  triangle)

$$CD = \frac{3\sqrt{2}-\sqrt{6}}{3} \cdot \sqrt{2} = \frac{6-\sqrt{12}}{3} = \frac{6-2\sqrt{3}}{3}$$

$$AD = \frac{\sqrt{2}}{\sqrt{3}} - \frac{3\sqrt{2}-\sqrt{6}}{3} = \frac{3\sqrt{2}-3\sqrt{6}+\sqrt{18}}{3\sqrt{3}} = \frac{3\sqrt{2}-3\sqrt{6}+3\sqrt{2}}{3\sqrt{3}} = \frac{6\sqrt{2}-3\sqrt{6}}{3\sqrt{3}} = \frac{2\sqrt{2}-\sqrt{6}}{\sqrt{3}} = \frac{2\sqrt{6}-\sqrt{18}}{3} = \frac{2\sqrt{6}-3\sqrt{2}}{3}$$

$$\text{Perimeter} = AB + BC + CD + AD = \sqrt{2} + \frac{2\sqrt{3}}{3} + \frac{6-2\sqrt{3}}{3} + \frac{2\sqrt{6}-3\sqrt{2}}{3} = \frac{3\sqrt{2}+2\sqrt{3}+6-2\sqrt{3}+2\sqrt{6}-3\sqrt{2}}{3} = \frac{6+2\sqrt{6}}{3}$$

$$\text{Area} = \text{rectangle} - \text{two } 45^\circ \text{ triangles} = \frac{\sqrt{2}}{\sqrt{3}} \cdot \sqrt{2} - \frac{1}{2} \left( \frac{\sqrt{2}}{\sqrt{3}} \right)^2 - \frac{1}{2} \left( \frac{3\sqrt{2}-\sqrt{6}}{3} \right)^2 = \frac{2}{\sqrt{3}} - \frac{2}{6} - \frac{18+6-6\sqrt{12}}{18}$$

$$= \frac{2\sqrt{3}}{3} - \frac{1}{3} - \frac{24-12\sqrt{3}}{18} = \frac{2\sqrt{3}}{3} - \frac{1}{3} - \frac{4-2\sqrt{3}}{3} = \frac{2\sqrt{3}-1-4+2\sqrt{3}}{3} = \frac{4\sqrt{3}-5}{3}$$